



DIPS EDUCATIONAL RESEARCH AND DEVELOPMENT BOARD
HOLIDAY TASKS FOR SUMMER BREAK
CLASS- 3rd



Dear Students,

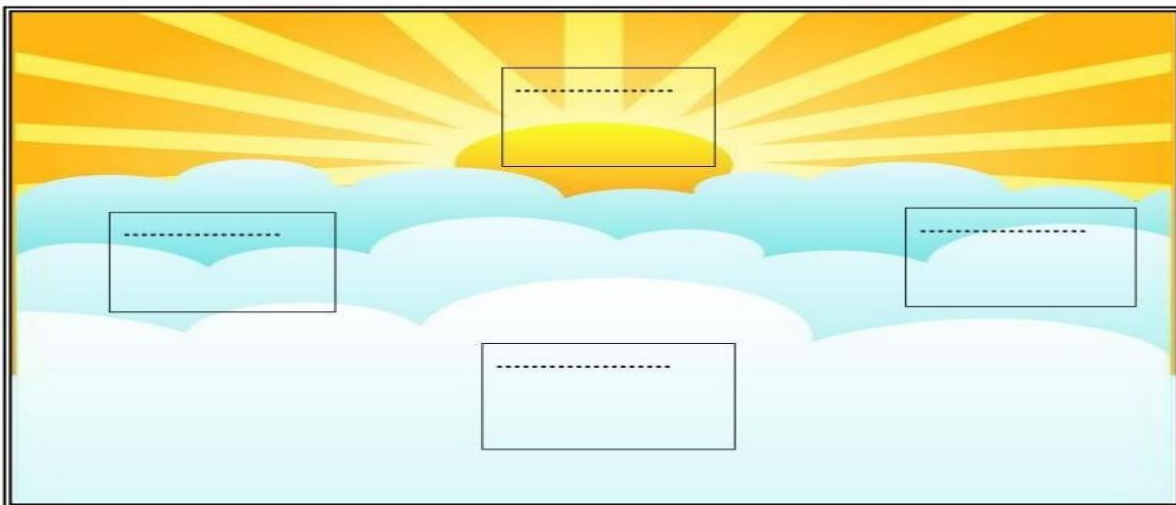
As the holidays approach, we hope you enjoy a refreshing and joyful break with your family. To keep the learning spirit alive, we have thoughtfully designed your holiday homework to be fun, engaging and creative. Here we go...

English

1. My Vocabulary Train: Learn five new English words each week. Write the meaning and make sentences of the words.
2. Read any story book of your choice. It could be a fairy tale, story from Panchatantra .Draw and colour any favourite character from the story book you read.
3. From the story book you have read display the new words you have learnt on a Word Tree.
4. Write and learn any ten synonyms, antonyms and rhyming words.
5. Make finger puppets or any other kind of puppets and prepare a story to be narrated in the class.

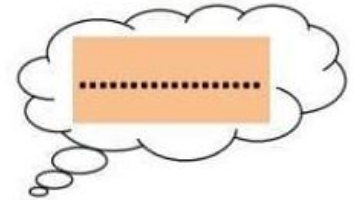
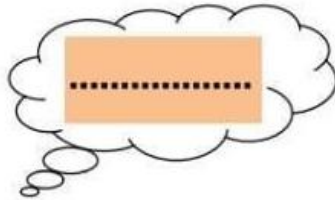
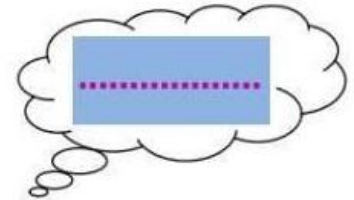
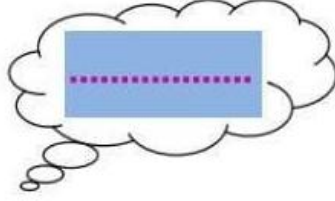
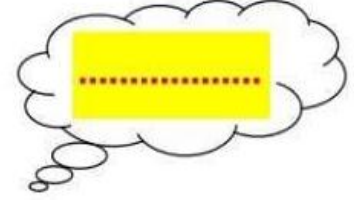
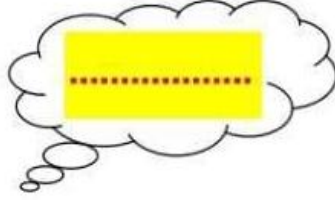

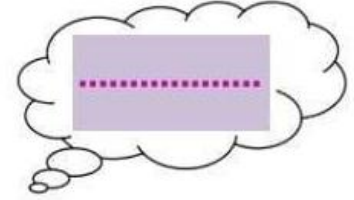
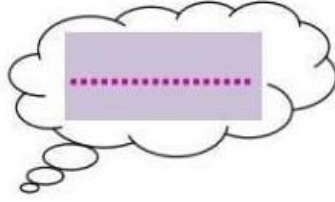
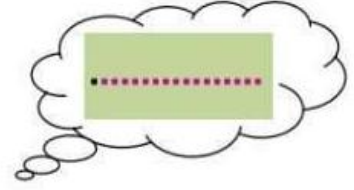
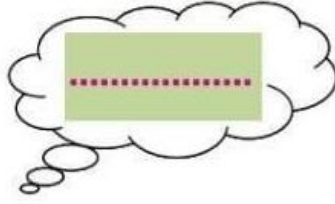
Hindi

प्रश्न 1. दिशाओं के नाम लिखो ।

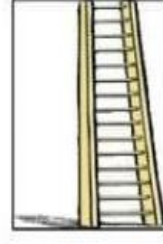


1. सूर्य _____ से निकलता है और _____ में डूबता है ।
2. हिमालय भारत _____ में है ।
3. कन्याकुमारी भारत के _____ में है ।

प्रश्न 2. चित्र पहचानकर उनके दो दो पर्यायवाची लिखिए ।



प्रश्न 3 . चित्र देखकर निम्न वर्ग पहेली में उनके नाम ढूंढो और खानों में भी रंग भरो ।



सि	पा	ही	ज	प	पी	ता
क	ग	रा	नी	ब	ला	उ
सी	ढी	ज	ढ	ध	ड	जी
टी	ठ	म	ग	र	म	भ
छ	द	क	भ	ती	र	म
ल	क	ड़ी	ज	प	न	घ
क्ष	ली	फ	रे	ल	गा	ड़ी



प्रश्न 4 चित्र वर्णन कीजिए ।



.....

.....

.....

.....

.....

.....

.....



Maths

Q1. Solve the following.

a.) $6 \times 5 =$

b.) $7 \times 4 =$

c.) $2 \times 6 =$

d.) $1 \times 1 =$

e.) $8 \times 7 =$

f.) $5 \times 0 =$

Q2. Fill in the blanks.

a.) $3 \times \underline{\quad} = 21$

b.) $\underline{\quad} \times \underline{\quad} = 24$

c.) $7 \times 3 = \underline{\quad} \times \underline{\quad} = \underline{\quad}$

d.) $5 \times \underline{\quad} = 7 \times \underline{\quad}$

Q3. Solve it.

a.)

TH	H	T	O
2	2	4	4
		X	3

b.)

TH	H	T	O
4	0	3	4
		X	2

c.)

TH	H	T	O
	6	3	2
		X	8

TH	H	T	O
	5	3	4
		X	7

Q4. Multiply the following.

$$\begin{array}{r} \text{a.) TH H T O} \\ 2 \quad 5 \quad 2 \\ \times \quad 2 \quad 3 \\ \hline \end{array}$$

$$\begin{array}{r} \text{b.) TH H T O} \\ 3 \quad 5 \quad 3 \\ \times \quad 4 \quad 3 \\ \hline \end{array}$$

$$\begin{array}{r} \text{c.) TH H T O} \\ 7 \quad 4 \quad 4 \\ \times \quad 5 \quad 4 \\ \hline \end{array}$$

$$\begin{array}{r} \text{d.) TH H T O} \\ 3 \quad 5 \quad 5 \\ \times \quad 7 \quad 5 \\ \hline \end{array}$$

Q4. A student has 5 sticker sheets. Each sheet contains 24 stickers. How many stickers does the student have in total?

Q5. There are 8 boxes of crayons in the classroom. Each box contains 12 crayons. How many crayons are there in total?

Q6. Make a multiplication wheel by using any table.



Q7. Multi-disciplinary project "Math in space- exploring the solar system"

I. Count and write the number of:

- Planets
- Moons
- Rocky vs. gaseous planets (paste pictures also)

II. Draw circles of different sizes to show how Jupiter is bigger than Earth.

Use ruler to measure and write:

- Jupiter:6cm
- Earth :3cm

“Which planet is bigger? By how many cm?”

Science

1. FILL IN THE BLANKS.

- We wear clothes according to _____ .



- We get _____ from the sheep.



- We wear _____ clothes in summers .



- Silk was first discovered in _____ .
- Cotton fibre is used to make _____ clothes.



2. WRITE TRUE OR FALSE.

- Woolen clothes keep us warm. _____
- We wear different clothes at different times of the year. _____
- Nylon and rayon are man-made fabrics. _____
- Silk is a dull and cheap fabric. _____ .
- We get silk from sheep.

3. TICK THE CORRECT OPTION.

- Which of these fibre is obtained from silkworm.
 - Wool.
 - Cotton
 - Rayon
 - Silk
- Clothes protect us from:
 - Food
 - Water
 - Weather
 - Homework

- Silk clothes are mostly worn during:
 - a.) Sleeping
 - b.) School
 - c.) Special occasions
 - d.) Sports
- Which of the following is a synthetic fibre ?
 - a.) Cotton
 - b.) Wool
 - c. Nylon
 - d. Silk

4. ANSWER THE FOLLOWING QUESTIONS.

- a.) Why do we wear clothes?
- b.) From where do we get wool?
- c.) Write two qualities of silk.

5. IDENTIFY AND WRITE THE NAME OF CLOTH.



6. PROJECT- COLLECT NATURAL AND MAN-MADE FIBRE PASTE THEM ON SCRAP BOOK AND IDENTIFY THEM.

7. CASE STUDY

Sara wakes up early in the morning. Today, she has to go to school, play with her friends in the park, and then attend a family wedding in the evening. Let's help Sara choose the right clothes for each part of her day!

Question 1: What should Sara wear to school in the morning?

- a) A swimsuit
- b) A school uniform or a neat T-shirt and pants
- c) A dress for a wedding
- d) Pajamas

Question 2: When Sara goes to play in the park after school, what should she wear?

- a) A jacket and boots
- b) Comfortable clothes like shorts and a T-shirt
- c) A fancy dress
- d) A winter sweater

Question 3: For the family wedding in the evening, which clothes would Sara wear?


- a) A T-shirt and jeans
- b) A fancy dress or traditional clothes
- c) Shorts and a cap
- d) Sports clothes

Punjabi

1. ਲੇਖ- ਮੇਰੇ ਮਾਤਾ ਜੀ ।

ਮਾਤਾ ਜੀ ਦੀ ਤਸਵੀਰ ਚਿਪਕਾਓ) 10 ਸਤਰਾਂ ਲਿਖੋ

2. ਚਿੱਤਰ ਵਰਨਣ (ਕਹਾਣੀ)



3. (5) ਪੰਛੀਆਂ ਦੀ ਤਸਵੀਰ ਚਿਪਕਾਓ ।

😊 Stay safe, have fun and make the most of your summer holidays!
We'll see you soon with new energy and bright smile. 😊

